

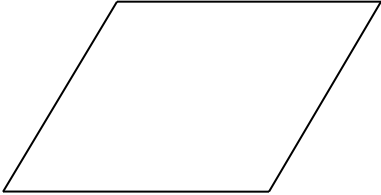
**MINISTRY OF EDUCATION, SCIENCE, TECHNOLOGY AND VOCATIONAL  
TRAINING**  
**THEMI HILL PRE/PRIMARY SCHOOL**  
**THIRD HOME PACKAGE MAY 2020**  
**MATHEMATICS GRADE IV**

NAME \_\_\_\_\_ STREAM \_\_\_\_\_ DATE \_\_\_\_\_

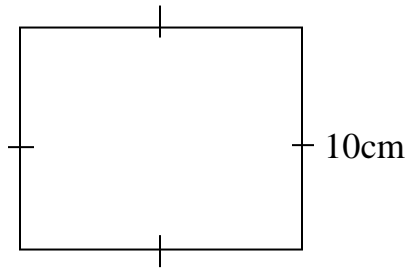
**INSTRUCTION**

- Answer all question correctly

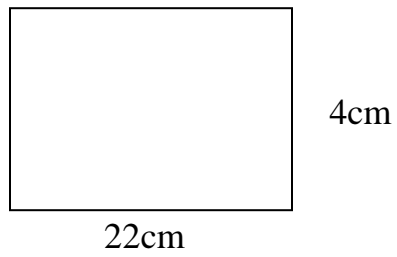
NO	QUESTIONS	WORKING SPACE	ANSWER,
1.	(i) Write the place value of 8 in 38219 (ii) Write the short form of $100+30+8000+10000+3$ (iii) Write the next number in the following list of numbers $3207,3214,3221$ _____ (iv) Write eight thousand, nine hundred and forty seven, in figures (numeral form) (v) Write the total value of 3 in 3254		
2.	(i) Arrange 990, 6990,8990,7990 in descending order.(from the biggest number to the smallest)		
	(ii) Write XXXIV in Hindu-Arabic numbers (Normal numbers)		
	(iii) Which of the following is the smallest number? $213,312,123,231$		

	<p>(iv) Find the missing number represented by letter K</p> $\begin{array}{r} 24k5 \\ + 2741 \\ \hline 5186 \end{array}$		
	<p>(v) Which number come after number 80, _____</p>		
<p>3.</p>	<p>(i) <math display="block">\begin{array}{r} 5879 \\ + 5101 \\ \hline \\ \hline \end{array}</math></p> <p>(ii) <math>34031 - 21415 =</math></p> <p>(iii) <math display="block">\begin{array}{r} 453 \\ \times 21 \\ \hline \\ \hline \end{array}</math></p> <p>(iv) <math>\frac{1}{12} + \frac{2}{12} + \frac{3}{12} =</math></p> <p>(v) 1600 balls were shared equally among 8 pupils, How many balls did each pupil get?</p>		
<p>4.</p>	<p>(i) How many line segments are to the following figure?</p> 		

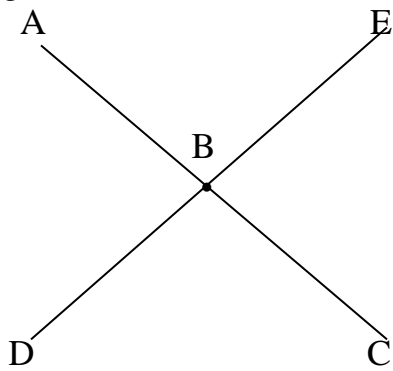
(ii) Find the perimeter of the figure below



(iii) Find the area of the figure below



(iv) Name the point of intersection in the figure below



(v) Write the fraction of the shaded part

