

**MINISTRY OF EDUCATION, SCIENCE, TECHNOLOGY AND VOCATIONAL
TRAINING**
THEMI HILL PRE/PRIMARY SCHOOL
HOLIDAY PACKAGE MAY 2020
MATHEMATICS GRADE II

NAME _____ STREAM _____ DATE _____

INSTRUCTION

Answer all questions

1. $199 + 384 + 417 =$

2.
$$\begin{array}{r} 42 \\ + 530 \\ \hline \end{array}$$

3. $493 - 70 =$

4.
$$\begin{array}{r} 100 \\ - 22 \\ \hline \end{array}$$

Write the following in long form

5. $25 =$ _____

6. $103 =$ _____

7. $9 =$ _____

Write in figure

8. One hundred = _____

9. Three hundred and ten = _____

Fill the following in correctly

10. 73 = _____ hundreds _____ tens _____ ones

Find the missing numbers

11. 700 , 750 , 800, 850 = _____

12. _____400, 401, 402, 403.

13. 236, 237, 238, 239, _____

Write in short form

14. $90 + 1$ _____

15. $400 + 0 + 0 =$ _____

Write the following in words

16. 913 = _____

17. $\frac{1}{4}$ _____

Fill in the box

18. $80 - \square = 25$

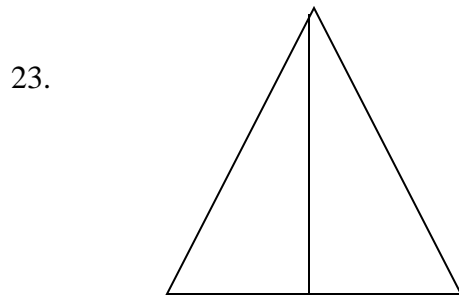
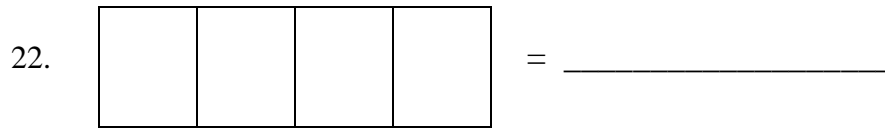
19. $\square - 68 = 18$

20. $55 + \square = 87$

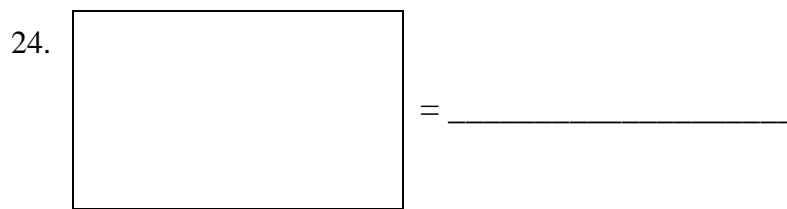
21. $\square + 44 = 99$

SECTION B

Write the fraction of the following your answer write in figure



Name the following shape below



25. Asha planted 493 trees last year and this year she has planted 507 trees. How many trees are there altogether?