

MINISTRY OF EDUCATION, SCIENCE, TECHNOLOGY AND VOCATIONAL TRAINING
THEMI HILL PRE/PRIMARY SCHOOL
HOLIDAY PACKAGE APRIL - 2020
MATHEMATICS GRADE II

NAME _____ STREAM _____ DATE _____

INSTRUCTION

- Answer all questions

Fill in the missing numbers

1. 103, 106, 109, _____, _____
2. 1,000, 800, 600, _____, _____

Write the numbers in short form

3. $0 + 4 =$
4. $100 + 10 + 0 =$

Write the following in long form

5. $728 =$ _____
6. $3 =$ _____

Write in words

7. $2,000 =$ _____
8. $19 =$ _____

Write in figures

9. One thousand =
10. Three hundred and fifty =

Add without carrying

11. $132 + 222 + 414 =$ _____

12. $\begin{array}{r} 214 \\ + 173 \\ \hline \end{array}$

Add by carrying

13. $808 + 89 =$

14. $\begin{array}{r} 128 \\ 271 \\ + 311 \\ \hline \end{array}$

Subtract without borrowing

15. $78 - 56 =$

16. $\begin{array}{r} 892 \\ + 450 \\ \hline \end{array}$

Subtract by borrowing

17. $\begin{array}{r} 927 \\ - 19 \\ \hline \end{array}$

18. $\begin{array}{r} 40 \\ - 12 \\ \hline \end{array}$

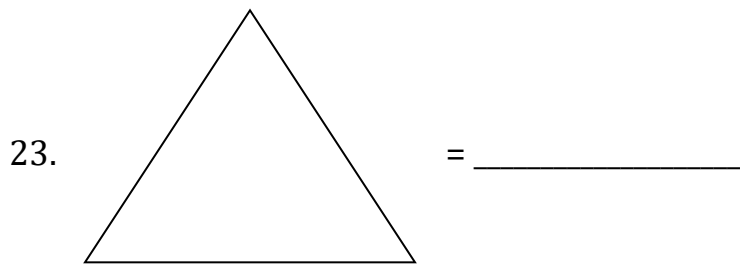
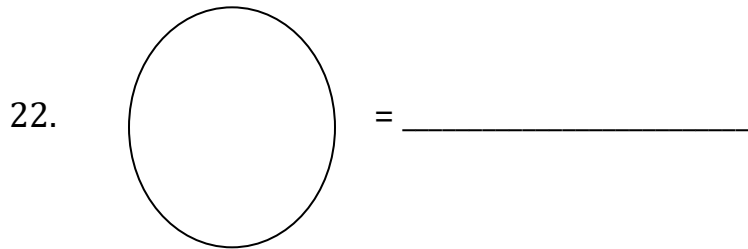
Write the place values of each number

19.2521 = _____ thousands _____ hundreds _____ tens _____ ones

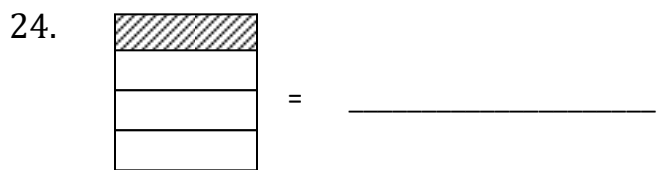
20.125 = _____ hundreds _____ tens _____ ones

21.40 = _____ tens _____ ones

Name the following figures



Write half ($\frac{1}{2}$) or quarter ($\frac{1}{4}$) for a shaded part in each of the following figures



25.