

MINISTRY OF EDUCATION, SCIENCE, TECHNOLOGY AND VOCATIONAL TRAINING
THEMI HILL PRE AND PRIMARY SCHOOL
HOLIDAY PACKAGE MAY -2019
GEO GRD III

NAME: _____

DATE: _____

TIME:-1hr

SECTION A:

CHOOSE THE MOST CORRECT ANSWER AND FILL IT IN THE BOX PROVIDED

1. _____ does not show the height of the object
(a) Real object (b) picture (c) map

2. In order to conserve the environment animals should _____
(a) Should be killed every day (c) Should be kept in a small number
(b) Should be chased away

3. The importance of wind is to _____
(a) Spread rain (c) Transport soil
(b) Transport water

4. Which of the following activities is friendly to the environment?
(a) Planting trees (c) Illegal fishing
(b) Burning bushes

5. _____ is a drawing of an object as it appears from above
(a) Picture
(b) Map (c) Real objects

6. _____ is an example of a map which can show few objects.
(a) School (c) Classroom
(b) Tanzania















7. Which among of the following can be found in a map of a village?
(a) Mosque (c) A pot
(b) Airport

SECTION B: WRITE TRUE AND FALSE

8. An example of a map of a single object is a map of school _____
9. A picture can be taken by a phone camera _____
10. A map of many objects can be of a school or village _____
11. In real object the size of the object is not real _____
12. The size of the objects in maps is not shown _____
13. There is huge difference between a map, a picture and a real object _____
14. Only the front side of the object can be seen picture _____

SECTION C:

MATCH EACH PICTURE OF AN OBJECT IN PART A WITH ITS CORRECT MAP IN PART B

15																				
16																				
17																				
18																				
19																				
20																				
21																				
		<table border="1"> <tbody> <tr> <td>LIST A</td> <td>14</td> <td>15</td> <td>16</td> <td>17</td> <td>18</td> <td>19</td> <td>20</td> <td>21</td> </tr> <tr> <td>LIST B</td> <td></td> <td></td> <td></td> <td></td> <td></td> <td></td> <td></td> <td></td> </tr> </tbody> </table>	LIST A	14	15	16	17	18	19	20	21	LIST B								
LIST A	14	15	16	17	18	19	20	21												
LIST B																				

SECTION D: FILL IN THE BLANKS

Mention two components of the environment

22. _____

23. _____

Mention two objects which can be found in a map of your class room

24. _____

25. _____